

DOWNLOAD PDF DOCUMENT



GEOMETRY CHAPTER 1 TEST...

DOWNLOAD DOCUMENT NOW

Updated: 10/11/2017

DISCLAIMER:

CHAUVIN.CO uses the following geometry chapter 1 test review book available for free PDF download which is also related with

GEOMETRY CHAPTER 1 TEST REVIEW

People, who like to read eBooks and constantly use digital libraries, confess that sometimes they cannot download geometry chapter 1 test review or other necessary files because of bugs on the site. We can explain you why this happens. It is because of various hackers' attacks that cause troubles to users of digital libraries. We offer you to download geometry chapter 1 test review for free after registration. This action provides for free, easy and unlimited use of our library and access to geometry chapter 1 test review. It will not take much time - just follow the link below and start the registration. You have to answer simple questions to become a constant user of our site and download geometry chapter 1 test review if needed. When you pass the registration, you will get an access to our digital library where you will be able to find eBooks of all existing genres and fields - geometry chapter 1 test review, belles-lettres, scientific literature and so on.

DOWNLOAD NOW

DOWNLOAD PDF DOCUMENT

DOWNLOAD PDF DOCUMENT

GEOMETRY CHAPTER 1 TEST...

[MICROSOFT WORD - CHAPTER 2 TEST REVIEW ANSWERS.DOCX](#)

Honors Geometry Chapter 2 Test Review Question Answers 1. Given: $BA \cong AT$ $(51 - x) + (y + 9) = 180$ Find: $m\angle MAT$ $y = 120 + x$ $(y + 9) + (x + y) = 90$ $B \cong x + 2y = 81$ $x + 2(120 + x) = 81$ $x + 240 + 2x = 81$ $3x = -159$ $M \cong 51 - x$ $y + 9 = N$ $A \cong x + y$ $x = -53$ $T \cong y = 120 + (-53) = 67$ $m\angle MAT = 180 - (x + y) = 180 - 14 = 166$ 2. A certain angle is 39 less than 2 times its complement. Find its supplement. $x = 2(90 - x) - 39$

File name: Chapter 2 Test Review Answers.pdf

[Download now or Read Online](#)

[MICROSOFT WORD - CHAPTER 11 TEST REVIEW QUESTION ANSWERS.DOCX](#)

Honors Geometry Chapter 11 Test Review Question Answers 1. Find the area of an equilateral triangle that has sides that measure 8 7 . $s = 3$ $A_{\text{Equ.}} = \frac{4}{3} (8 7)^2 = 3 448 3 = = = (112 3) u^2 4 4 2$. A rotor of a Wankel automotive engine has the geometric shape shown. The center of each arc is the opposite vertex of the equilateral triangle. a. Find the figure's area a. $A = A + 3(A_{\text{Segment}})$ b. Find the figur...

File name: Chapter 11 Test Review Question Answers.pdf

[Download now or Read Online](#)

[EXAMVIEW - CHAPTER 14 TEST REVIEW- WILLIAMS.TST](#)

Name: Period: Date: K. Williams ID: A8th Grade Chapter 14 TEST REVIEW 1. Determine the volume of the cylinder. Use 3.14 for π . 2. Complete the table to identify the effect tripling the radius of a cylinder's base has on its volume. Cylinder radius Cylinder Area of Cylinder Height Cylinder Volume (cm) r Base (cm) $A = \pi r^2$ (cm) h (cm) $V = \pi r^2 h$ 1 1 3 1 9 1 3. Identify the radius, diameter, and height ...

File name: ExamView - Chapter 14 Test Review- Williams.pdf

[Download now or Read Online](#)

NAME: _____

Period: Chapter 6 Test Review ...

File name: Chapter 6 Test Review w_ Answer Key.pdf

















[Download now or Read Online](#)

DOWNLOAD PDF DOCUMENT

DOWNLOAD PDF DOCUMENT

Here below another book similar with:

GEOMETRY CHAPTER 1 TEST...

-  [geometry chapter 1 test review](#)
-  [chapter 2 geometry test](#)
-  [holt geometry chapter 4 test form b](#)
-  [geometry cumulative review chapters 3 answers](#)
-  [geometry final exam review packet answers form](#)
-  [new york high school geometry review packets](#)
-  [geometry semester exam review answers](#)
-  [california standards review practice geometry answers](#)
-  [geometry review answers ch 3](#)
-  [radiology abdominal specialty review and self assessment statpearls review series](#)
-  [nt1210 chapter 7 review answers](#)
-  [holt physical science chapter six review answers](#)
-  [chapter 8 covalent bonding vocabulary review](#)
-  [chapter 9 section 3 guided reading review answers](#)
-  [dave ramsey chapter 1 review answers](#)
-  [chapter 7 guided reading review answers economics](#)
-  [chapter 7 cell structure and function section review 1 answer key](#)
-  [chapter review quiz](#)
-  [chapter 5 review the periodic law mixed answer key](#)
-  [chapter 19 bacteria and viruses section review 2 reviewing key concepts](#)

DOWNLOAD PDF DOCUMENT