

DOWNLOAD PDF DOCUMENT



GEOMETRY REVIEW ANSWERS...

DOWNLOAD DOCUMENT NOW

Updated: 10/20/2017

DISCLAIMER:

CHAUVIN.CO uses the following geometry review answers ch 3 book available for free PDF download which is also related with

GEOMETRY REVIEW ANSWERS CH 3

When you need to download geometry review answers ch 3 for free, you can do it from our online library. The process will not take much time. Just download the necessary program and register. Step-by-step instruction is easy to understand even by newbies. If you are here for the first time, use the following link to start downloading. After registration you will be able to get geometry review answers ch 3 on your device and use it any time when it is needed. Some people ask why we use such a complicated (as they may think) way to supply with the access to geometry review answers ch 3 and other PDF data. It is clear. Constant hackers' attacks made us take such measures. Don't think that registration requires sms-confirmation or charge. It is completely free. We provide for an access to geometry review answers ch 3 and tons of other files that will be useful for everyone. It is beaus our eBook library contains books of various genres and fields including rare editions. Download geometry review answers ch 3 now without paying for it.

DOWNLOAD NOW

DOWNLOAD PDF DOCUMENT

DOWNLOAD PDF DOCUMENT

GEOMETRY REVIEW ANSWERS...

[MICROSOFT WORD - CHAPTER 2 TEST REVIEW ANSWERS.DOCX](#)

Honors Geometry Chapter 2 Test Review Question Answers 1. Given: $BA \cong AT$ $(51 - x) + (y + 9) = 180$ Find: $m\angle MAT$ $y = 120 + x$ $(y + 9) + (x + y) = 90$ $B \cong x + 2y = 81$ $x + 2(120 + x) = 81$ $x + 240 + 2x = 81$ $3x = -159$ $M \cong 51 - x$ $y + 9 = N$ $A \cong x + y$ $x = -53$ $T \cong y = 120 + (-53) = 67$ $m\angle MAT = 180 - (x + y) = 180 - 14 = 166$ 2. A certain angle is 39 less than 2 times its complement. Find its supplement. $x = 2(90 - x) - 39$

File name: Chapter 2 Test Review Answers.pdf

[Download now or Read Online](#)

[GEOMETRY/ HONORS GEOMETRY REVIEW ANSWERS](#)

Honors Geometry B Review ANSWERS 1 120 18 176 55cm 22 256 64 54 94in 23 48 64 214 80 ft 24 D5 A6 a True b True c False d False e True 7 18 3 28 50 5 29 45 3 51 10 The coordinates of PQMN are P 1 2 Q 4 5 M 7 3 N 4 0 PQ 32 32 18 MN 32 32 18 QM 32 22 13 PN 32 22 13 Therefore the opposite sides are congruent 110 6 6 0 The coordinates of the midpoint M M 3 32 2 Triangle AMB is a right triangle since the slope of AM...

File name:

[Download now or Read Online](#)

[CH 8 REVIEW](#)

Ch 8 Final Review Answers 1) -3,-4,-5 2) 247 3) 483 4) 12 ? 4 2 5) 81 3 6) -781250 7) 18 ? 9 5 8) 0.997 9) 1220 10) 44y 11) 16 2 12) 30th term 1 13) -1.5 14) 540 15) 9840 16) ? 7 17) 1 18) 100,105,110 19) 30 20) Not possible, $r > 1$ 21) All real #s 22) -1.5, 4 23) a) .007 in. b) 6.662 in. c) 2 swings d) 6.667 in. 24) 138 cans 25) 36 rows 26) 93 in. 27) 180 6 ? 28) 10 29) a) ? (4n ? 11) n ? 1 b) ? (4n...

File name: Final Review Answers Chp 8 (2011).pdf

[Download now or Read Online](#)

[MICROSOFT WORD - 2013-2014 HONORS ALGEBRA 2 A REVIEW ANSWERS](#)

HONORS ALGEBRA 2 A Semester Exam Review Answers 1. $y = 0$ $x = 3$? x , if $x = 0$ 2. $f = x$? ? ? $x = 1$. if $x = 0$? $x = 2$, if $x = 1$? 3. $f = x$? ? ? ? $x = ?$, if $x = 1$? ? 12 ? 5 x , if $1 = x = 5$? 4. a. $G = x$? ? ? 12 ? 4.50 x , if $6 = x = 9$ or $5 = x = 10$? 12 ? 3.50 x , if $x = 10$? b. 8 items 5. a. $y = 0$ $x = MCPS 20132014 1$ HONORS ALGEBRA 2 A Semester Exam Review Answers 5. b. all real numbers c. $g = x$? 4 d. ? ? 2, ? 4 ? ...

File name: 2013-2014-Honors-Algebra-2-A-Review-Answers.pdf



















[Download now or Read Online](#)

DOWNLOAD PDF DOCUMENT

DOWNLOAD PDF DOCUMENT

Here below another book similar with:

GEOMETRY REVIEW ANSWERS...

-  [geometry cumulative review chapters 3 answers](#)
-  [geometry final exam review packet answers form](#)
-  [geometry semester exam review answers](#)
-  [california standards review practice geometry answers](#)
-  [geometry review answers ch 3](#)
-  [geometry chapter 1 test review](#)
-  [new york high school geometry review packets](#)
-  [radiology abdominal specialty review and self assessment statpearls review series](#)
-  [carnegie learning geometry student text answers](#)
-  [10th grade prentice hall geometry answers](#)
-  [geometry semester 2 final exam apex answers](#)
-  [holt geometry exercise answers](#)
-  [geometry homework answers learning](#)
-  [carson dellosa cd 2215 geometry answers](#)
-  [geometry mcdougal test 3assessment answers](#)
-  [e2020 geometry quiz answers](#)
-  [geometry eoc spring packet answers](#)
-  [geometry houghton mifflin reflection answers](#)
-  [pearson education inc geometry worksheet answers](#)
-  [pearson florida geometry workbook answers](#)

DOWNLOAD PDF DOCUMENT